

FUNNY MONEY starring Rudy Rabbit and Woovis the Dog






FIGURE IT OUT!

1. Rudy Rabbit has two \$10 bills. How much money does he have?

Use mental math to solve each problem.

2. What is the value of four \$10 bills? Six \$10 bills? Ten \$10 bills?

3. What is the value of eight \$100 bills? Sixteen \$100 bills? Twenty-five \$100 bills?

4. Rudy has \$400. How many \$100 bills equal \$400? How many \$10 bills equal \$400?

5. Rudy has \$5,700. How many \$100 bills could he get for \$5,700? How many \$10 bills could he get for \$5,700?

SUPER CHALLENGE: Fill in the chart by multiplying. What pattern do you see?

1 x 20	2 x 20	3 x 20	4 x 20	5 x 20
20				
6 x 20	7 x 20	8 x 20	9 x 20	10 x 20