




GOT THE TIME? starring Rudy Rabbit and Harry Horse

**FIGURE IT OUT!**

1. The time on Harry Horse's first watch reads 11:30. What time is it on the second watch?
- _____

2. Suppose Harry's first watch is 1 hour ahead of the second watch. The second watch reads 8:00. What time is it on Harry's first watch?
- _____

3. The time on a clock is 5:08. What time will it be in 17 minutes? What time will it be in 45 minutes?
- _____

4. The time on a clock is 11:30. What time will it be in 35 minutes? What time will it be in 1 hour and 15 minutes?
- _____

5. The time on a clock is 2:37. What time will it be in 4 hours and 14 minutes? What time will it be in 9 hours and 23 minutes?
- _____

SUPER CHALLENGE: The time on a clock is 3:22. What time was it 24 minutes earlier? What time was it 56 minutes earlier?